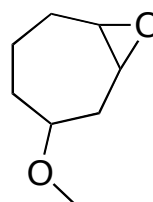
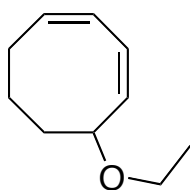
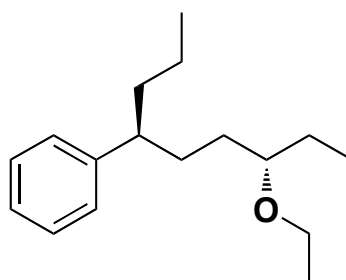
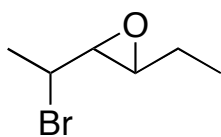
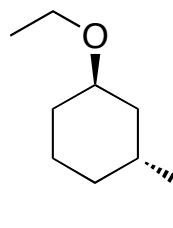
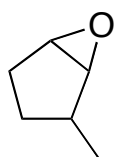
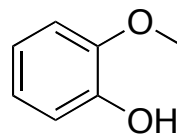
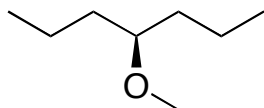


Problem Set 4
Chapter 11 Ethers and Epoxides

1. Give the proper IUPAC names of the following molecules (indicate stereochemistry when appropriate):



2. Complete the following reactions.

